


Name _____




How Much Does it Weigh?



Directions: Draw a picture of each of your objects. Write the name of the object on the line. Place one object on each side of the balance scale. Circle the picture of the heavier object. Place an X on the picture of the lighter object. Weigh each object using teddy bear counters. Record the number of teddy bear counters for the object that was weighed.




It weighs _____



It weighs _____





It weighs _____



It weighs _____

